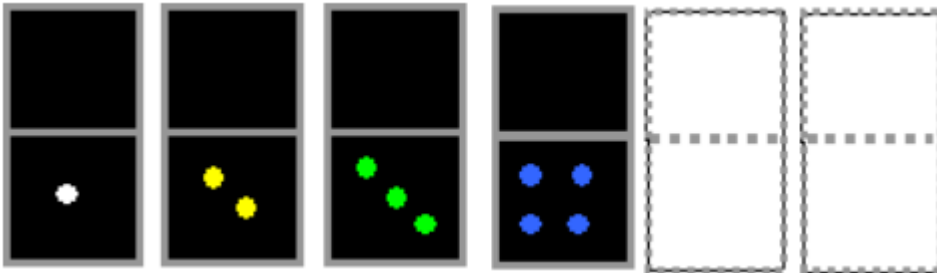


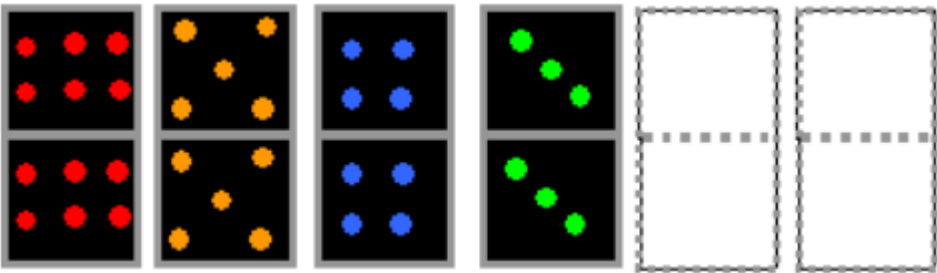
Next Domino

Which comes next in each pattern of dominoes? Can you explain how you know?

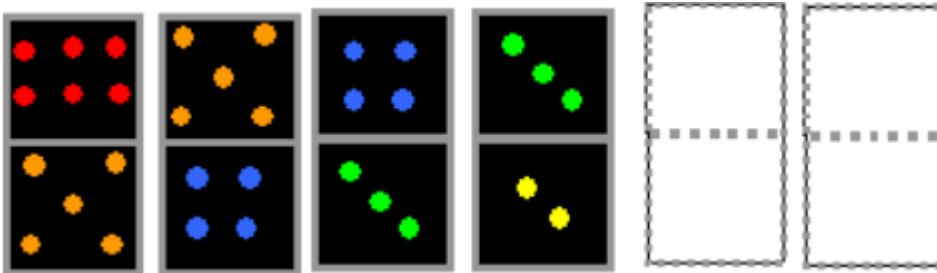
Pattern 1



Pattern 2



Pattern 3



If you have dominoes at home, you could see what other patterns you can make.

You could make dominoes out of paper or use the interactive ones here: www.mathsbot.com/manipulatives/dominoes (all of the dominoes that start with each number are stacked underneath each other)